

2nd Grade

Blizzard Bag

#1




Grandparents Day

We celebrate Grandparents Day on the first Sunday after Labor Day each year. It is a day to honor our grandparents.

I made my grandparents a card for their special day. Inside the card, I drew pictures of us playing together.

I think grandparents are special because they are very wise. They can teach their grandchildren lots of things!



Name _____




1. What day of the week do we celebrate Grandparents Day?

2. Why do we celebrate Grandparents Day?

3. What did the girl in the story give her grandparents?


4. Why did the girl in the story think grandparents are special?



In the evening the city
Goes to bed
Hanging lights
About its head.
by Langston Hughes

Write the last four lines of the poem in your best manuscript handwriting.

Handwriting practice lines consisting of four sets of three horizontal lines (top solid, middle dashed, bottom solid).



- My writing has good
- My writing has good
- My writing has good
- My writing has good

Name _____

Relate Addition and Subtraction



Add. Then write a related subtraction sentence.

1. $6 + 2 = \underline{8}$

$4 + 5 = \underline{\quad}$

2. $3 + 6 = \underline{\quad}$

$2 + 4 = \underline{\quad}$

3. $5 + 6 = \underline{\quad}$

$3 + 7 = \underline{\quad}$

4. $1 + 5 = \underline{\quad}$

$9 + 3 = \underline{\quad}$

Is the addition related to the subtraction? Write yes or no.

5. $5 + 5 = 10$

$10 - 5 = 5$

$8 + 2 = 10$

$8 - 2 = 6$

$1 + 9 = 10$

$10 - 1 = 9$

6. $2 + 9 = 11$

$11 - 2 = 9$

$6 + 6 = 12$

$6 - 6 = 0$

$4 + 3 = 7$

$4 - 3 = 1$

Problem Solving

7. Keesha counts 9 bugs.
Ronnie counts 2 bugs.
How many bugs are there
in all?

_____ bugs

There are 11 grasshoppers.
2 grasshoppers jump away.
How many grasshoppers
are left?

_____ grasshoppers

